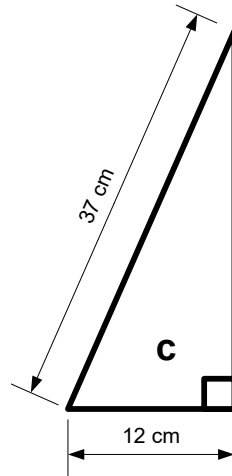
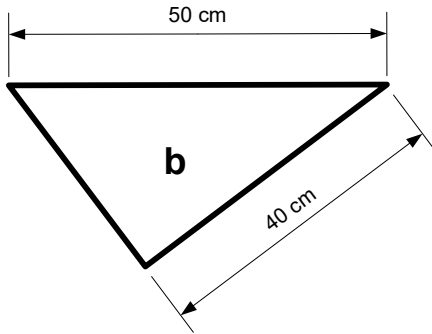
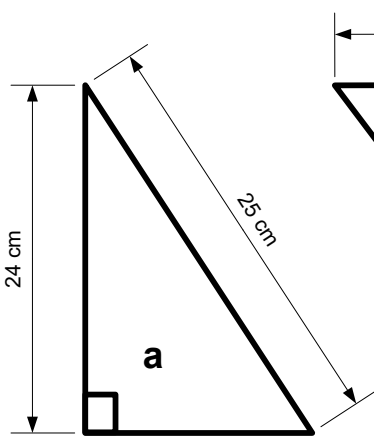


Calculating c: $x = \sqrt{a^2 + b^2}$

Calculating a or b: $x = \sqrt{c^2 - b^2}$

a Find the length of the missing side.
b Calculate the perimeter of each shape.
c Calculate the area of each shape.



DO NOT SCALE

